





Magic Minus Time!

Look at the pictures carefully. Take away the smaller group from the bigger group. Write how many are left in the box. Count slowly and see how numbers can disappear like magic!

 $-$  $=$

 $-$  $=$

 $-$  $=$

 $-$  $=$

Magic Minus Time!

Look at the pictures carefully. Take away the smaller group from the bigger group. Write how many are left in the box. Count slowly and see how numbers can disappear like magic!

